

Regardez à la liste de mots suivants. En dessous de chaque mot (ou groupes de mots), indiquez s'ils appartiennent à :


- A) symétrie en ligne verticale
- B) symétrie en ligne horizontale
- C) symétrie rotationnelle
- D) une combinaison de A), B) et/ou C)

SWIMS

BID

AVA

COOKBOOK



EXCEEDED

bid

WOW



ONIONS

OXO

MOM

CHICK

CODEBOOK

HAH

DECIDED

MAAM



HUH

HOH

OKEECHOBEE

TUT

DIOXIDE

BOOHOO



TOOT



BEDECKED

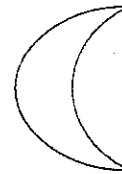
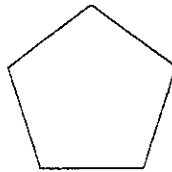
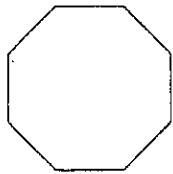
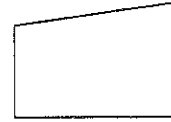
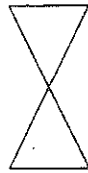
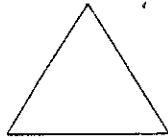
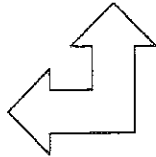
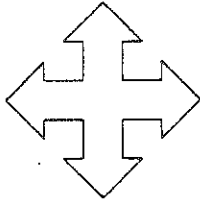
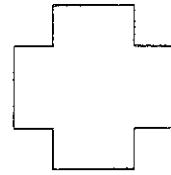
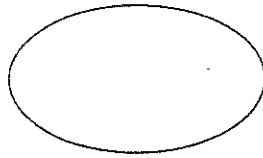
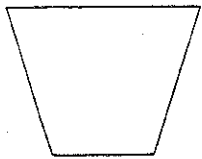
OTTO

NOON

CHECKBOOK

Pour chaque figure ci-dessous :

- 1) Dessine les axes de symétrie
- 2) Indique l'ordre de rotation
- 3) Indique le degré de rotation



M A T H S